

Name

Lesson 8

Ways to Make 6 and 7



My Homework

Homework Helper







Need help? connectED.mcgraw-hill.com

There are many ways to make sums of 6 and 7.

 
4 + 2 = 6

 
3 + 3 = 6

 
5 + 2 = 7

 
3 + 4 = 7

Practice

Write different ways to make 6 and 7.

Ways to Make 6 or 7

1. _____ + _____ = 6

2. _____ + _____ = 6

3. _____ + _____ = 6

4. _____ + _____ = 6

5. _____ + _____ = 7

6. _____ + _____ = 7

7. _____ + _____ = 7

8. _____ + _____ = 7

Add.

$$\begin{array}{r} 9. \quad 6 \\ + 0 \\ \hline \end{array}$$

$$\begin{array}{r} 10. \quad 5 \\ + 2 \\ \hline \end{array}$$

$$\begin{array}{r} 11. \quad 4 \\ + 3 \\ \hline \end{array}$$

$$\begin{array}{r} 12. \quad 1 \\ + 6 \\ \hline \end{array}$$

$$\begin{array}{r} 13. \quad 3 \\ + 3 \\ \hline \end{array}$$

$$\begin{array}{r} 14. \quad 2 \\ + 4 \\ \hline \end{array}$$

15. There are 2 rabbits eating. 5 more rabbits join them. How many rabbits are eating in all?

_____ rabbits



Brain Builders

16. Test Practice Lily and Kyle each planted 3 trees. How many trees were planted?

8 trees



7 trees



6 trees



4 trees



Math at Home Give your child 7 objects. Then have your child show different ways to make two groups that show 7 in all.